

Skip Counting by 3s

Draw a circle around every 3rd number! (Going from left to right)

1 2 3 4 5 6 7 8 9

10 11 12 13 14 15 16

17 18 19 20 21 22 23

24 25 26 27 28 29 30

31 32 33 34 35 36 37

38 39 40 41 42 43 44

45 46 47 48 49 50 51

52 53 54 55 56 57 58

Count by 3s.

0, 3, 6, _____, _____, _____, _____, _____


What is 3 less than 30? _____

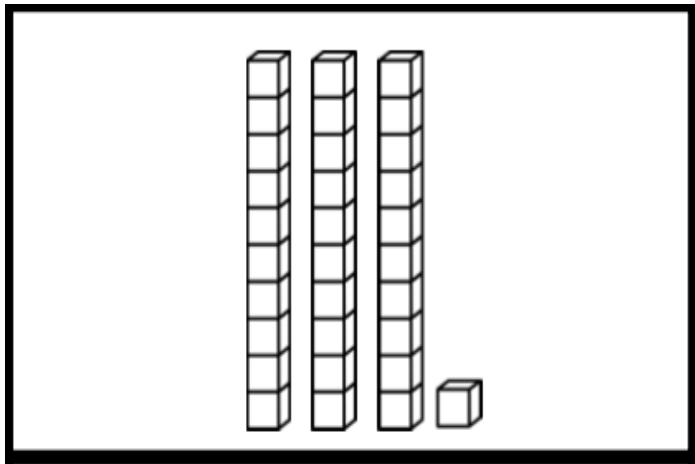
What is 3 more than 27? _____







Subtract 3 from 9. What is the answer? _____

There are 4 plates. Each plate has 3 pretzels on it.

How many pretzels in all? Draw a picture to solve. _____





 Hundreds 	 Tens 	 Ones 

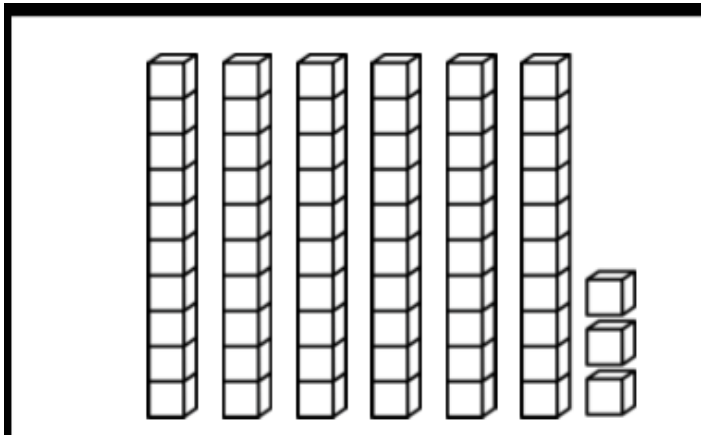
Numerical Written Answer

Write your Numerical Written Answer here for the question above

Answer: _____

Write your answer above in the first gap below and **count on by 3s**

_____ / _____ / _____ / _____ / _____ / _____ / _____ / _____



 Hundreds 	 Tens 	 Ones 

Numerical Written Answer

Write your Numerical Written Answer here for the question above

Answer: _____

Write your answer above in the first gap below and **count on by 3s**

If you have time: Hint: Start at 78 and count by 3s backwards!

