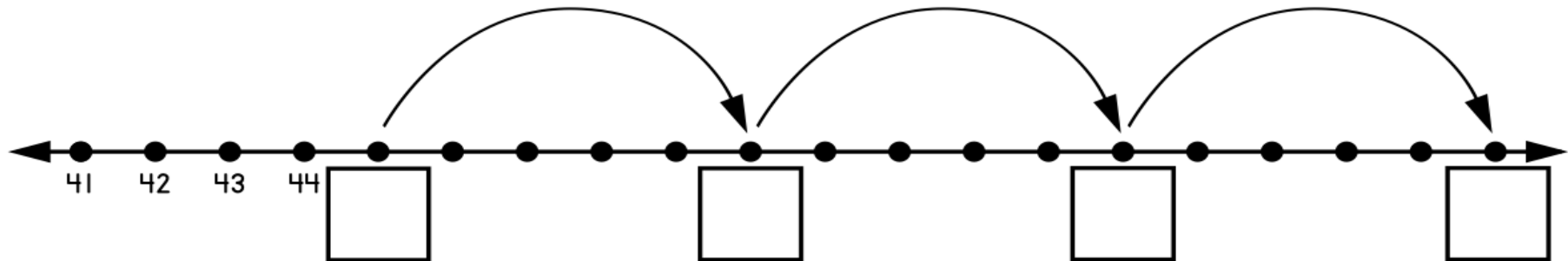
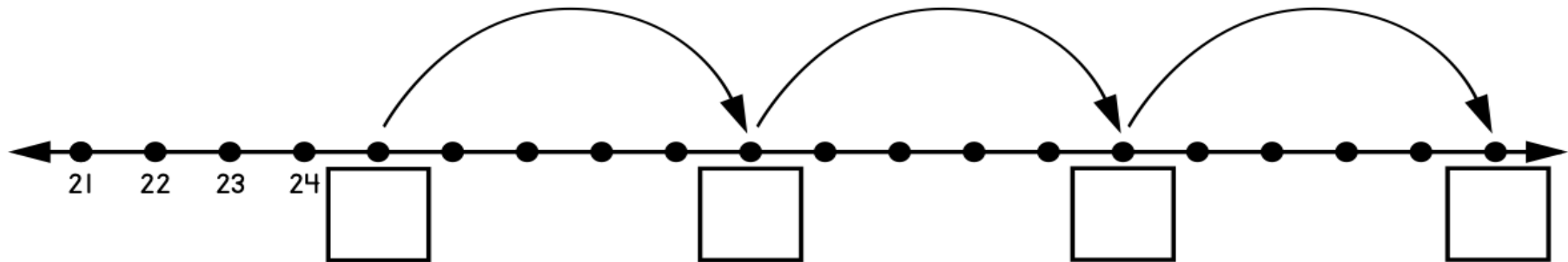
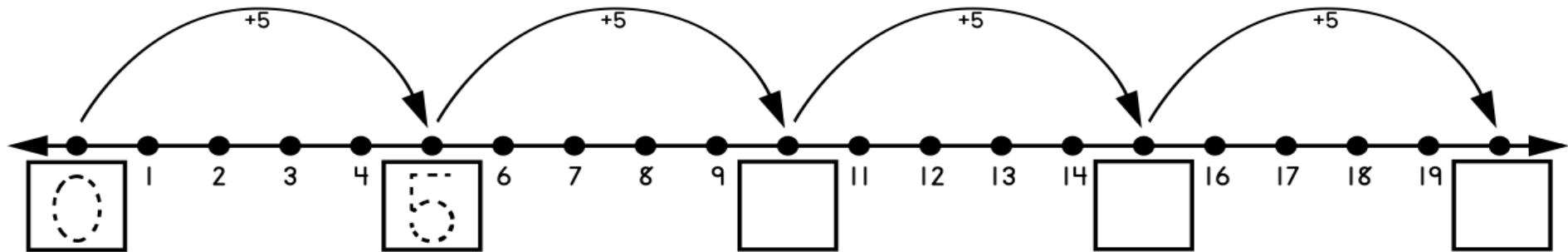


Name: _____

Count by 5s

Count by 5s and fill in the missing numbers on the number lines.



Count by 5 from 5 to 320

5				25	30		
			60		70		80
85							120
					190		
	210				230		
				265			
			300				320

Counting in 5s from any number!

71	66	61	56				
----	----	----	----	--	--	--	--

99	94	89					
----	----	----	--	--	--	--	--

32	37	42	47				
----	----	----	----	--	--	--	--

54	59	64	69				
----	----	----	----	--	--	--	--

1. Count by 5s.

0, 5, 10, _____, _____, _____, _____


2. What is 5 less than 35? _____

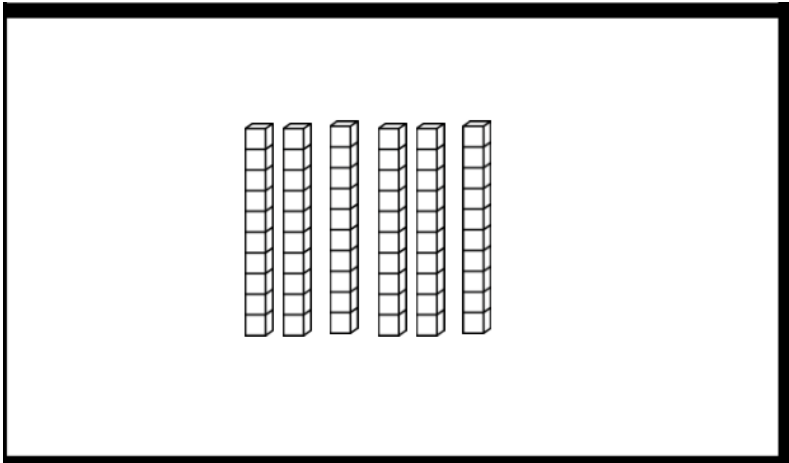
3. What is 5 more than 45? _____

4. Subtract 5 from 60. What is the answer? _____

There are 4 dogs. Each dog has 5 toys.

How many dog toys in all? Draw a picture to solve. _____





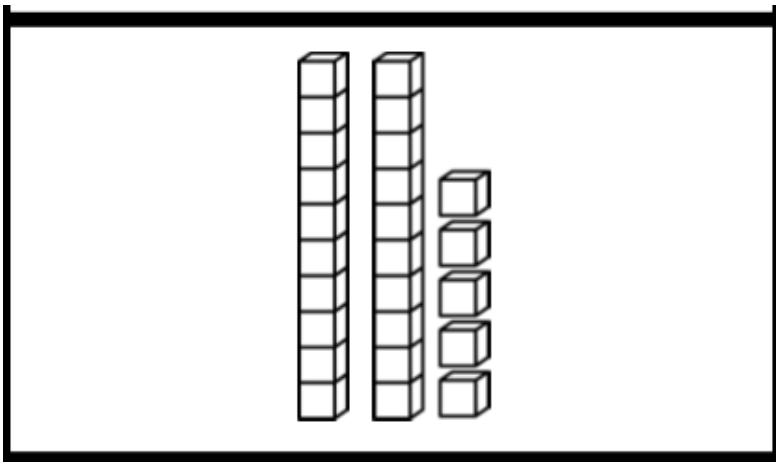
Hundreds 	Tens 	Ones 

Numerical Written Answer

Write your Numerical Written Answer here for the question above

Answer: _____

Write your answer above in the first gap below and count by 5s



Hundreds 	Tens 	Ones 

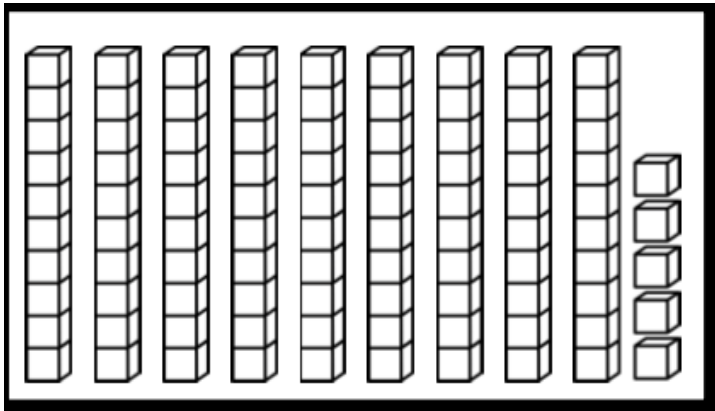
Numerical Written Answer

Write your Numerical Written Answer here for the question above

Answer: _____

Write your answer above in the first gap below and count by 5s

_____, _____, _____, _____, _____, _____, _____, _____



Hundreds 	Tens  	Ones  

Numerical Written Answer

Write your Numerical Written Answer here for the question above

Answer: _____

Write your answer above in the first gap below and count by 5s

_____, _____, _____, _____, _____, _____, _____, _____