

START

60

70

80

What fits into the number sequence?

Finish the number sequence and say it out loud!

5, 10, ____, 20,
25, ____, 35

Finish the number sequence and say it out loud!


12, 17, ____, 27,
32, ____, 42

5, ____, ____, ____, ____,

25, ____, ____, ____, ____,

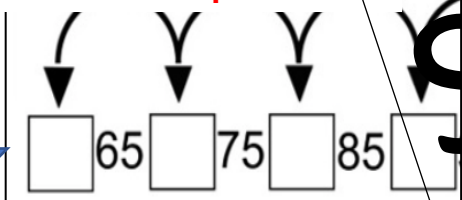
Finish the sequence and say it out loud!

Finish the sequence



Answer out loud:
What is 5 more than 40?
What is 5 more than 305?

Finish the sequence



Finish the number sequence and say it out loud


145, ____, ____, 160

Finish the number sequence and say it out loud!

67, 72, ____,
82, 87, ____,
97



Counting by 5s what fits the empty balloons?



What fits into the number sequence?

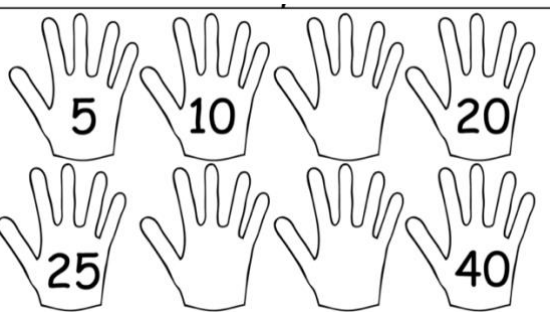


Counting by 5s, what fits the empty balloons?


Finish the number sequence and say it out loud!

205, ____, 215, ____,
225, ____, 235, ____,
245, ____, 255, ____,

Finish the sequence



Finish the sequence



What is 5 more than 200?

Then add 5 more

What is your final answer?

FINISH